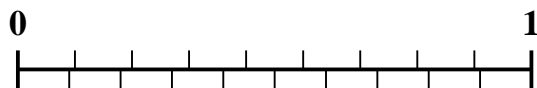




Use the number line to solve each problem.


1) Which amount is larger, $\frac{2}{9}$ or 0.36?



2) Which amount is larger, $\frac{1}{4}$ or 0.38?




3) Which amount is larger, $\frac{1}{5}$ or 0.35?



4) Which amount is larger, $\frac{4}{9}$ or 0.56?



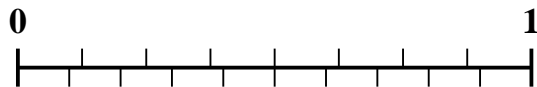
5) Which amount is larger, $\frac{6}{10}$ or 0.48?



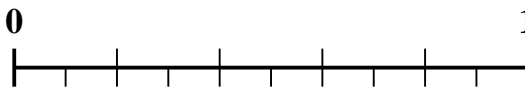
6) Which amount is larger, $\frac{3}{9}$ or 0.15?



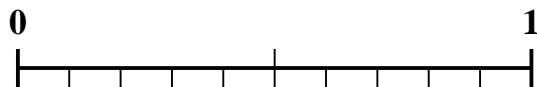
7) Which amount is larger, $\frac{3}{8}$ or 0.49?



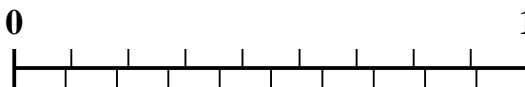
8) Which amount is larger, $\frac{3}{5}$ or 0.71?



9) Which amount is larger, $\frac{1}{2}$ or 0.64?



10) Which amount is larger, $\frac{6}{9}$ or 0.52?



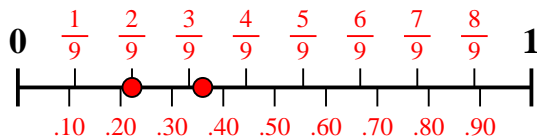
Answers

1. _____
2. _____
3. _____
4. _____
5. _____
6. _____
7. _____
8. _____
9. _____
10. _____

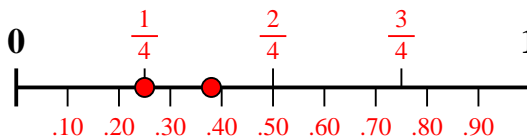


Use the number line to solve each problem.

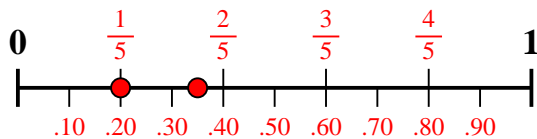
1) Which amount is larger, $\frac{2}{9}$ or 0.36?



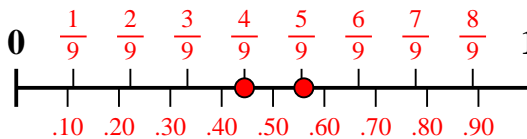
2) Which amount is larger, $\frac{1}{4}$ or 0.38?



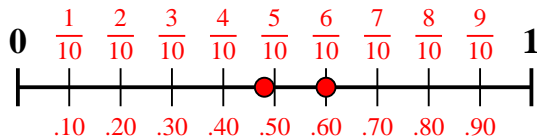
3) Which amount is larger, $\frac{1}{5}$ or 0.35?



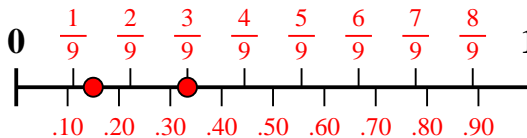
4) Which amount is larger, $\frac{4}{9}$ or 0.56?



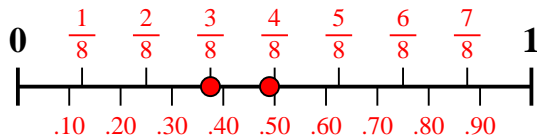
5) Which amount is larger, $\frac{6}{10}$ or 0.48?



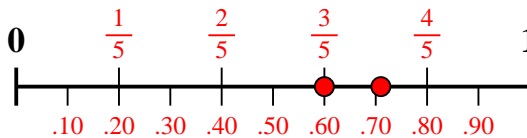
6) Which amount is larger, $\frac{3}{9}$ or 0.15?



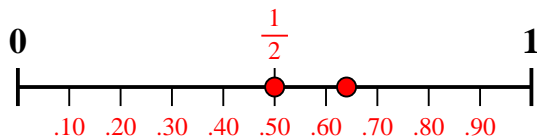
7) Which amount is larger, $\frac{3}{8}$ or 0.49?



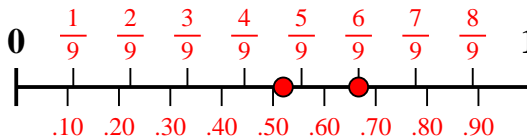
8) Which amount is larger, $\frac{3}{5}$ or 0.71?



9) Which amount is larger, $\frac{1}{2}$ or 0.64?



10) Which amount is larger, $\frac{6}{9}$ or 0.52?



Answers

1. 0.36
2. 0.38
3. 0.35
4. 0.56
5. $\frac{6}{10}$
6. $\frac{3}{9}$
7. 0.49
8. 0.71
9. 0.64
10. $\frac{6}{9}$